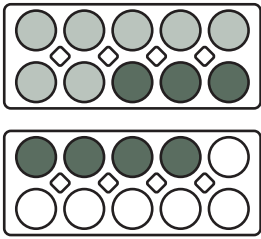
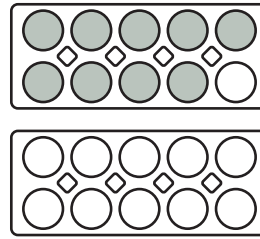


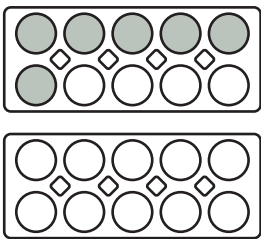
Fülle die Kästchen und rechne über den Zehner!



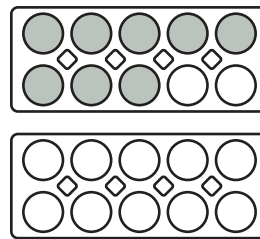
$$\begin{array}{r} 7 + 7 = 14 \\ \hline 7 + 3 = 10 \\ 10 + 4 = 14 \end{array}$$



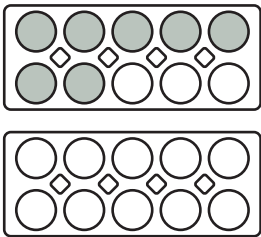
$$\begin{array}{r} 9 + 3 = \square \\ \hline 9 + \square = 10 \\ 10 + \square = \square \end{array}$$



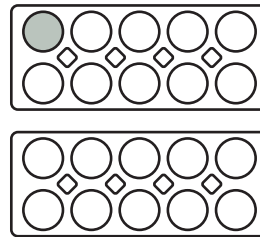
$$\begin{array}{r} 6 + 9 = \square \\ \hline 6 + \square = 10 \\ 10 + \square = \square \end{array}$$



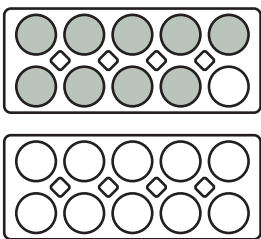
$$\begin{array}{r} 8 + 4 = \square \\ \hline 8 + \square = 10 \\ 10 + \square = \square \end{array}$$



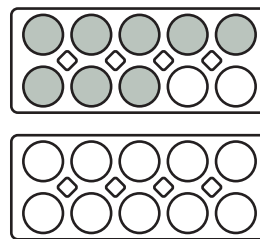
$$\begin{array}{r} 7 + 4 = \square \\ \hline 7 + \square = 10 \\ 10 + \square = \square \end{array}$$



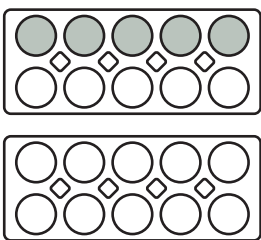
$$\begin{array}{r} 1 + 10 = \square \\ \hline 1 + \square = 10 \\ 10 + \square = \square \end{array}$$



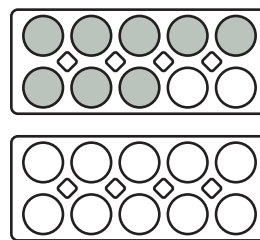
$$\begin{array}{r} 9 + 5 = \square \\ \hline 9 + \square = 10 \\ 10 + \square = \square \end{array}$$



$$\begin{array}{r} 8 + 9 = \square \\ \hline 8 + \square = 10 \\ 10 + \square = \square \end{array}$$



$$\begin{array}{r} 5 + 8 = \square \\ \hline 5 + \square = 10 \\ 10 + \square = \square \end{array}$$



$$\begin{array}{r} 8 + 6 = \square \\ \hline 8 + \square = 10 \\ 10 + \square = \square \end{array}$$

