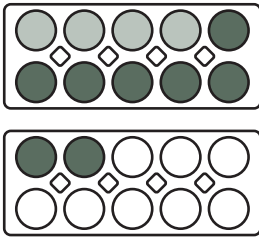


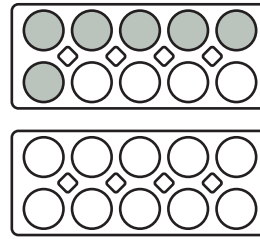
Fülle die Kästchen und rechne über den Zehner!



$$4 + 8 = 12$$

$$4 + 6 = 10$$

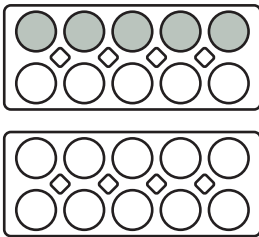
$$10 + 2 = 12$$



$$6 + 7 = \square$$

$$6 + \square = 10$$

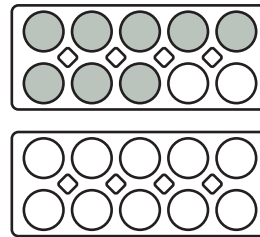
$$10 + \square = \square$$



$$5 + 9 = \square$$

$$5 + \square = 10$$

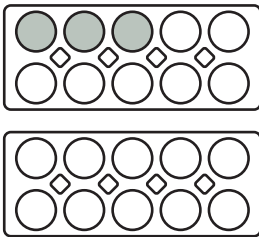
$$10 + \square = \square$$



$$8 + 3 = \square$$

$$8 + \square = 10$$

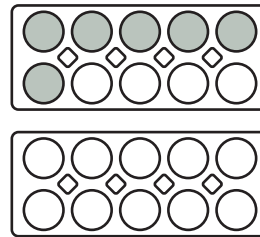
$$10 + \square = \square$$



$$3 + 9 = \square$$

$$3 + \square = 10$$

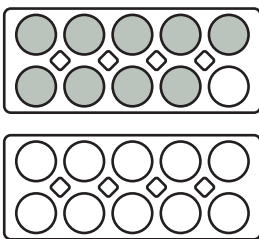
$$10 + \square = \square$$



$$6 + 6 = \square$$

$$6 + \square = 10$$

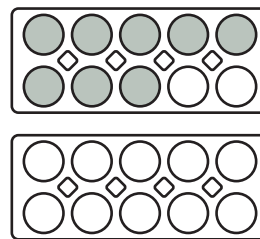
$$10 + \square = \square$$



$$9 + 7 = \square$$

$$9 + \square = 10$$

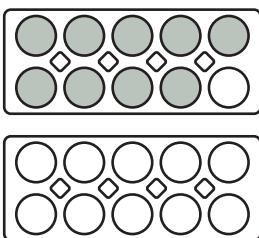
$$10 + \square = \square$$



$$8 + 6 = \square$$

$$8 + \square = 10$$

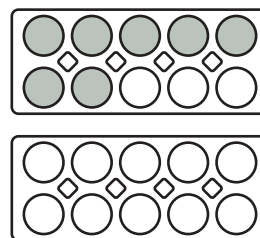
$$10 + \square = \square$$



$$9 + 9 = \square$$

$$9 + \square = 10$$

$$10 + \square = \square$$



$$7 + 7 = \square$$

$$7 + \square = 10$$

$$10 + \square = \square$$

